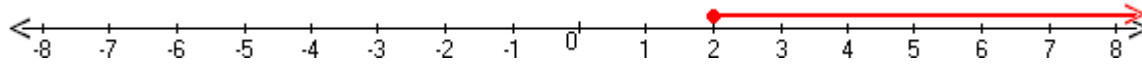


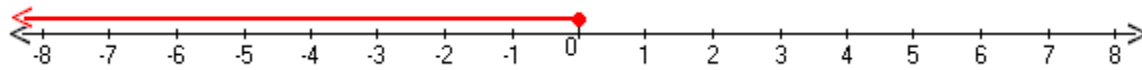
Student Name: \_\_\_\_\_

Score: \_\_\_\_\_

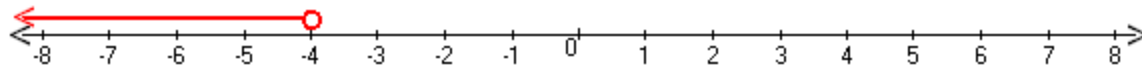
**Write the Inequalities for Graphs**



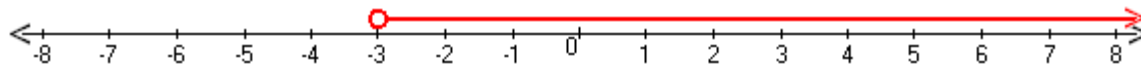
Inequality: \_\_\_\_\_



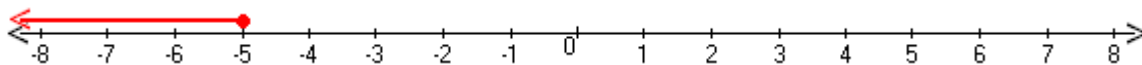
Inequality: \_\_\_\_\_



Inequality: \_\_\_\_\_



Inequality: \_\_\_\_\_

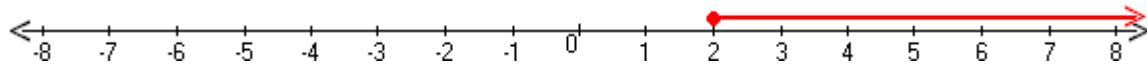


Inequality: \_\_\_\_\_

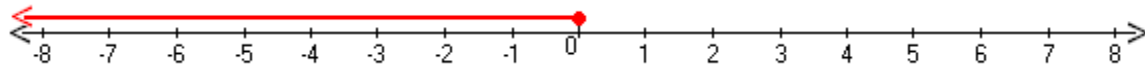
Student Name: \_\_\_\_\_

Score: \_\_\_\_\_

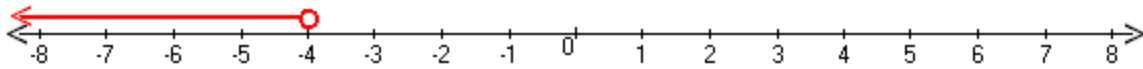
### Answers



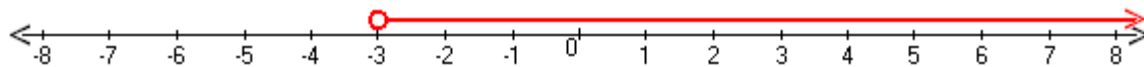
Inequality:  $x \geq 2$



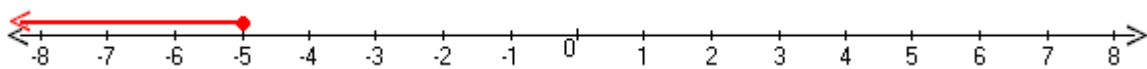
Inequality:  $x \leq 0$



Inequality:  $x < -4$



Inequality:  $x > -3$



Inequality:  $x \leq -5$